






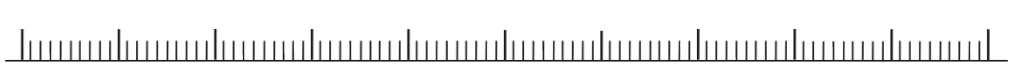
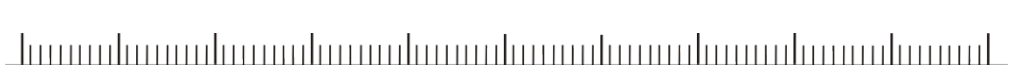



More Decimal Thousandths – Practice the Skill

Name _____

Date _____

Mark the numbers on number line.

| | | |
|----|-------|--|
| 1 | 0.220 |  |
| 2 | 0.215 |  |
| 3 | 0.262 |  |
| 4 | 0.280 |  |
| 5 | 0.249 |  |
| 6 | 0.205 |  |
| 7 | 0.295 |  |
| 8 | 0.273 |  |
| 9 | 0.275 |  |
| 10 | 0.210 |  |