


12 Times Table Space Race

Multiply the numbers on the track.

Write them down as you go around.


Use a timer to see how long it takes you to finish the race!



The track is a winding path with the following numbers in order from start to finish:

6	11	10	5	12	8	4	1
1	8	3	9	6	4	8	1
8	3	9	6	4	8	4	1
5	2	11	6	3	9	7	1

The central circle contains $\times 12$.




START

12 Times Table Space Race Answers

Multiply the numbers on the track.

Write them down as you go around.

Use a timer to see how long it takes you to finish the race!



x12

72	6	10	5	11	120	60	12
1	8	3	9	6	4	48	144
12	96	36	108	72	96	8	8
96	36	108	72	48	4	4	4
60	24	132	72	36	108	84	12
5	2	11	6	3	9	7	1

