

Name \_\_\_\_\_

Date \_\_\_\_\_




# READING SCALES METRIC 5C

Use your knowledge of fraction and the number system to work out these measurements. Remember to write down the units of measurement.

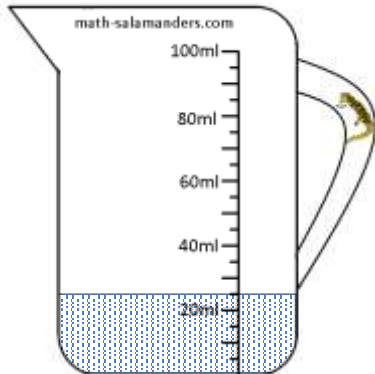
1) How long? \_\_\_\_\_



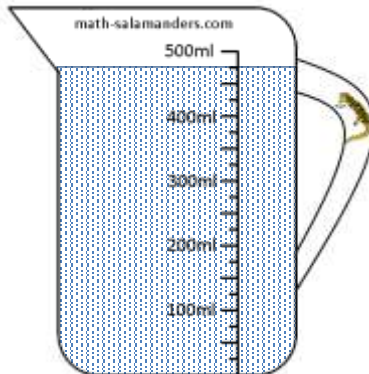
2) How long? \_\_\_\_\_



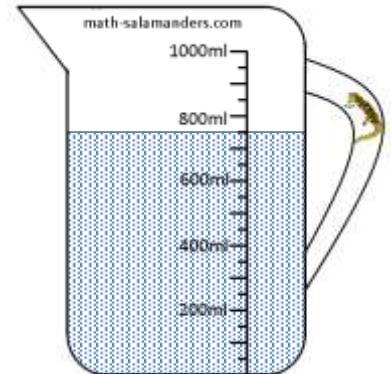
3) How much? \_\_\_\_\_



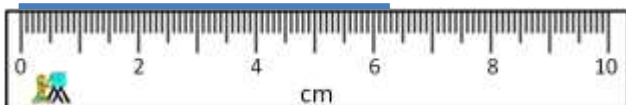
4) How much? \_\_\_\_\_




5) How much? \_\_\_\_\_



6) How long? \_\_\_\_\_



7) How long? \_\_\_\_\_



8) How heavy? \_\_\_\_\_



9) How heavy? \_\_\_\_\_



10) How heavy? \_\_\_\_\_



Name

Date



# READING SCALES METRIC 5C ANSWERS

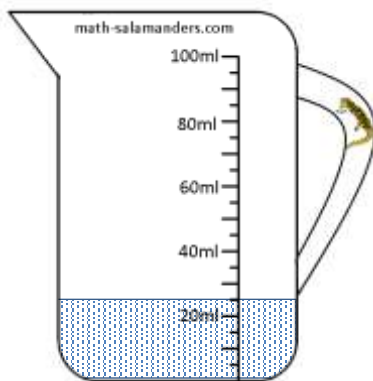
1) How long? 7.6cm



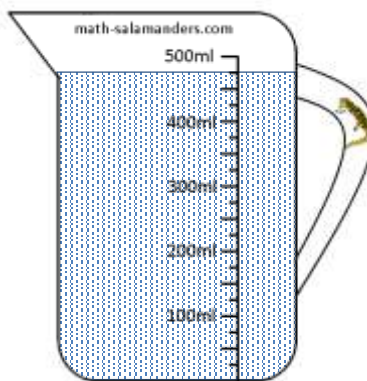
2) How long? 53mm



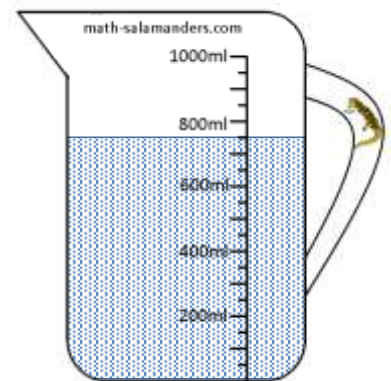
3) How much? 25ml



4) How much? 475ml




5) How much? 750ml



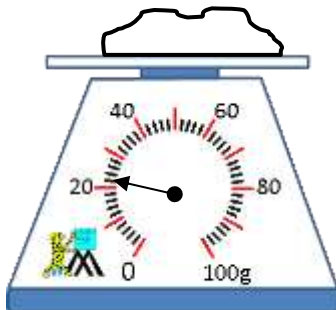
6) How long? 6.3cm



7) How long? 96mm



8) How heavy? 22g



9) How heavy? 480g



10) How heavy? 560g

