

Name _____

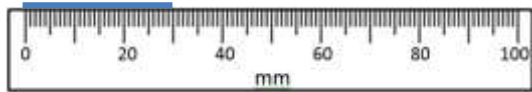
Date _____



READING SCALES 3E

Use your knowledge of the number system to read these scales which are going up ones, fives and tens. Remember to include the units of measurement.

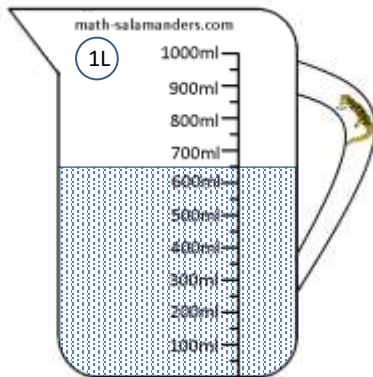
1) How long? _____



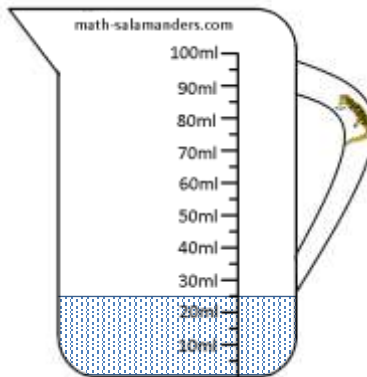
2) How long? _____



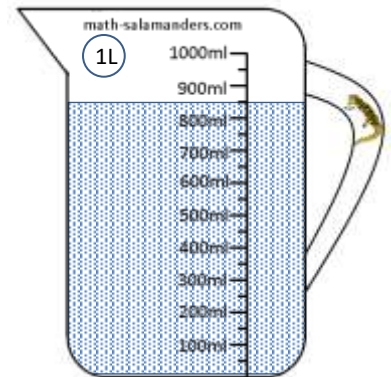
3) How much? _____




4) How much? _____




5) How much? _____



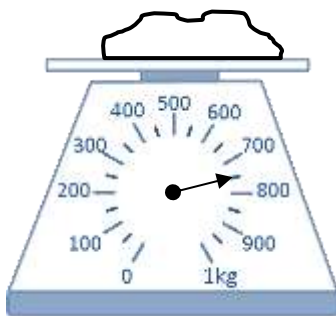
6) How long? _____



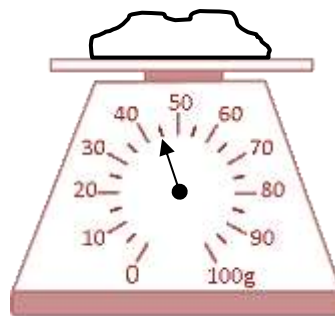
7) How long? _____



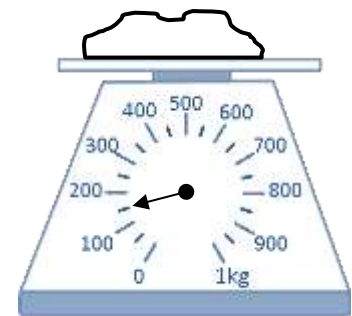
8) How heavy? _____



9) How heavy? _____



10) How heavy? _____



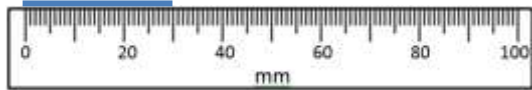
Name

Date

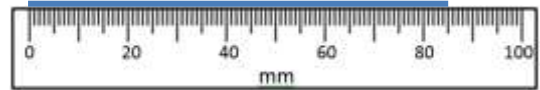


READING SCALES 3E ANSWERS

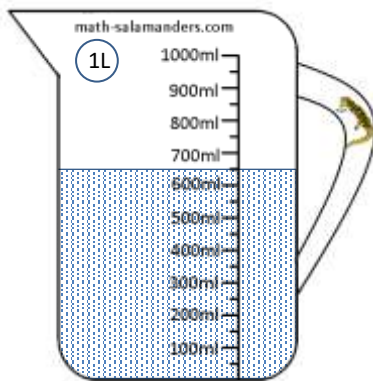
1) How long? 30mm



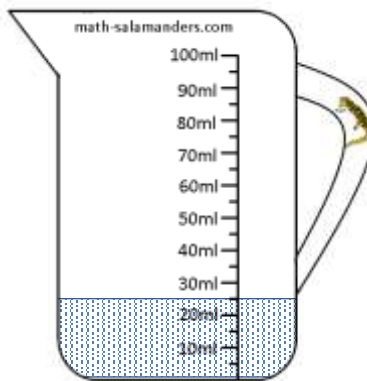
2) How long? 85mm



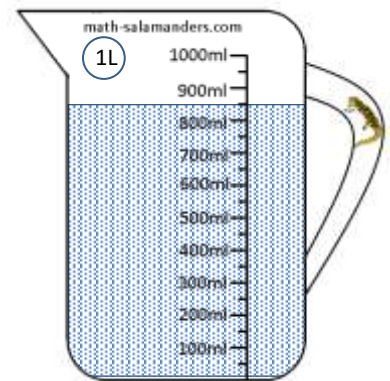
3) How much? 650ml



4) How much? 25ml



5) How much? 850ml



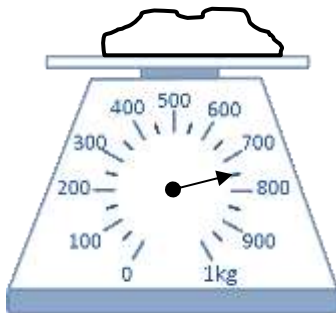
6) How long? 5cm



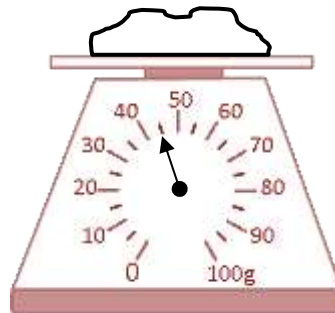
7) How long? 9.5 (or 9 1/2) cm



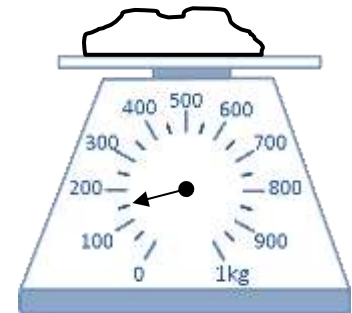
8) How heavy? 750g



9) How heavy? 45g



10) How heavy? 150g



Free Math Sheets, Math Games and Math Help

MATH-SALAMANDERS.COM