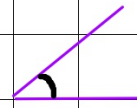
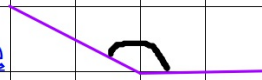


I am learning to recognise acute and obtuse angles

Acute - smaller than a right angle




Obtuse - bigger than a right angle

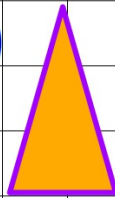


Can you describe the angles in these shapes?

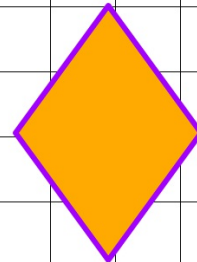
1)



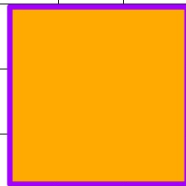
2)



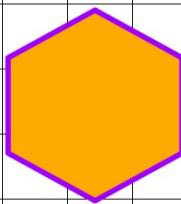
3)



4)

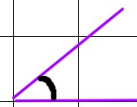


5)

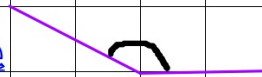


I am learning to recognise acute and obtuse angles

Acute - smaller than a right angle



Obtuse - bigger than a right angle

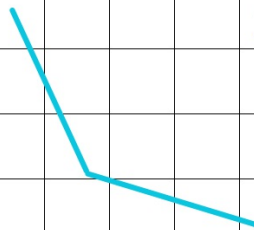


Can you identify which angles are acute and which are obtuse?

1)



2)



3)



4)



5)



