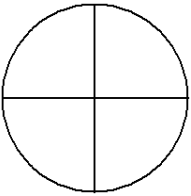
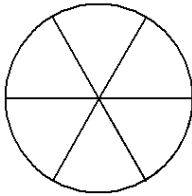
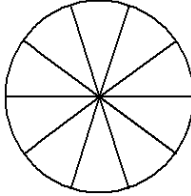
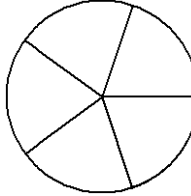
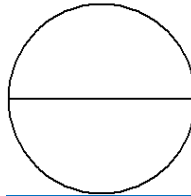
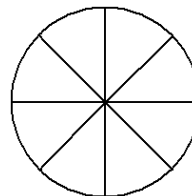
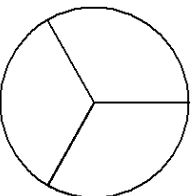
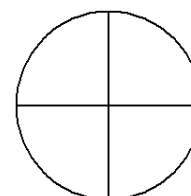
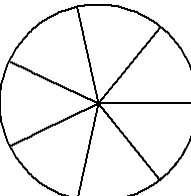
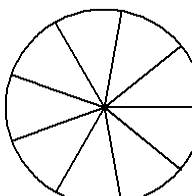
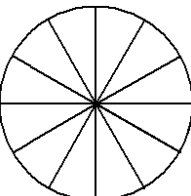
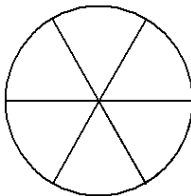
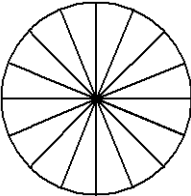
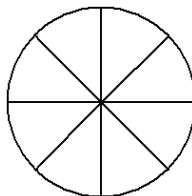
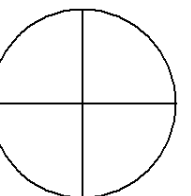
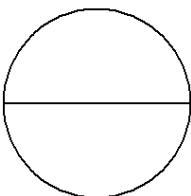
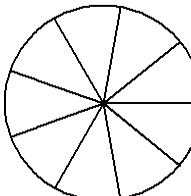
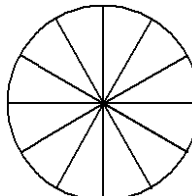
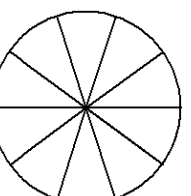
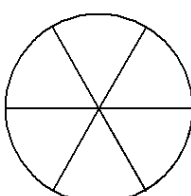


Student Name: _____

Score: _____

Color and Compare

Color each pie that represents the fraction and fill in the box with > or < or =:

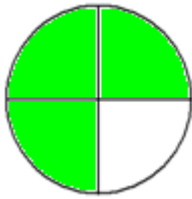
| | |
|--|---|
| 1)   $\frac{3}{4}$ <input type="text"/> $\frac{5}{6}$ | 2)   $\frac{6}{10}$ <input type="text"/> $\frac{3}{5}$ |
| 3)   $\frac{1}{2}$ <input type="text"/> $\frac{3}{8}$ | 4)   $\frac{1}{3}$ <input type="text"/> $\frac{1}{4}$ |
| 5)   $\frac{6}{7}$ <input type="text"/> $\frac{7}{9}$ | 6)   $\frac{9}{12}$ <input type="text"/> $\frac{5}{6}$ |
| 7)   $\frac{14}{16}$ <input type="text"/> $\frac{6}{8}$ | 8)   $\frac{2}{4}$ <input type="text"/> $\frac{1}{2}$ |
| 9)   $\frac{8}{9}$ <input type="text"/> $\frac{8}{12}$ | 10)   $\frac{7}{10}$ <input type="text"/> $\frac{4}{6}$ |

Student Name: _____

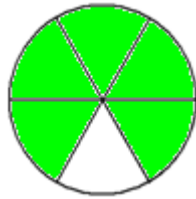
Score: _____

Answers

1)

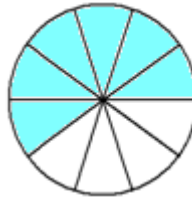


$\frac{3}{4}$

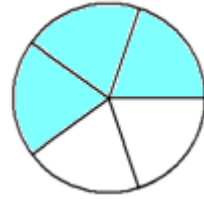


$\frac{5}{6}$

2)

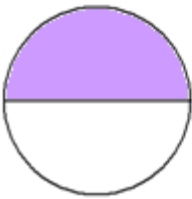


$\frac{6}{10}$

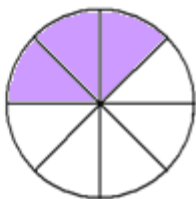


$\frac{3}{5}$

3)



$\frac{1}{2}$



$\frac{3}{8}$

4)

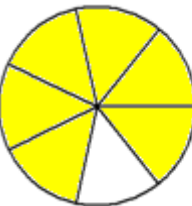


$\frac{1}{3}$

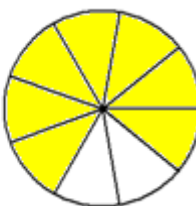


$\frac{1}{4}$

5)

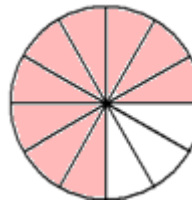


$\frac{6}{7}$

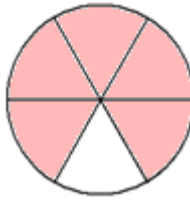


$\frac{7}{9}$

6)

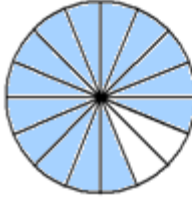


$\frac{9}{12}$

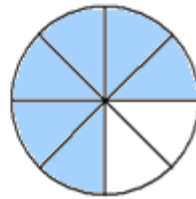


$\frac{5}{6}$

7)

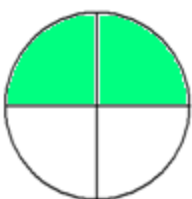


$\frac{14}{16}$

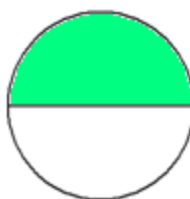


$\frac{6}{8}$

8)

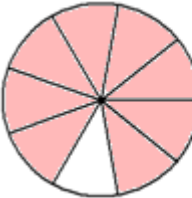


$\frac{2}{4}$

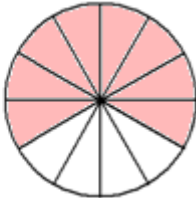


$\frac{1}{2}$

9)

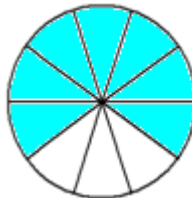


$\frac{8}{9}$

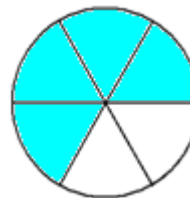


$\frac{8}{12}$

10)



$\frac{7}{10}$



$\frac{4}{6}$