

# 7 times table

Name: \_\_\_\_\_

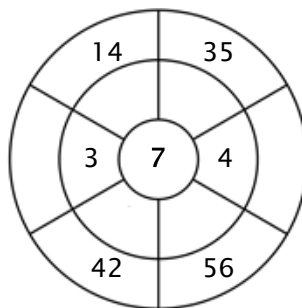
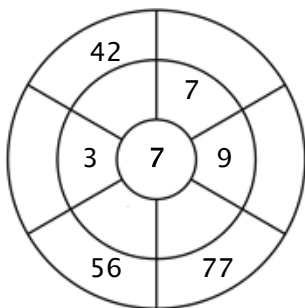
## Exercise 1:

Color in all of the boxes that are the solutions of this time table.

35	70	14	28	3
65	44	77	9	14
77	56	1	70	42
56	19	37	7	22
49	28	35	63	33

## Exercise 2:

Complete the circle by multiplying the number in the center by the middle ring to get the outer numbers.



## Exercise 3:

Fill in the correct product.

a)  $3 \times 7 = \underline{\quad}$

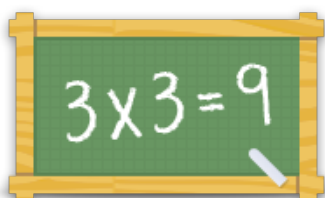
b)  $10 \times 7 = \underline{\quad}$

c)  $12 \times 7 = \underline{\quad}$

d)  $4 \times 7 = \underline{\quad}$

e)  $7 \times 7 = \underline{\quad}$

f)  $6 \times 7 = \underline{\quad}$



For more worksheets, games and exercises:  
[www.timestables.co.uk](http://www.timestables.co.uk)