


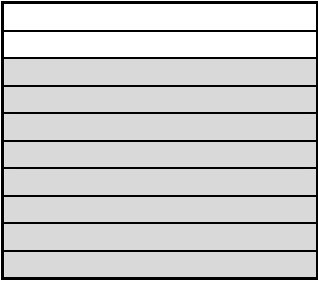













# Writing Tenths and Hundredths as Decimals (4)



Name: \_\_\_\_\_

Date: \_\_\_\_\_

- Write as decimals...

 $\frac{3}{10}$ <input type="text" value="0.3"/>	 $\frac{8}{10}$ <input type="text"/>	 $\frac{4}{10}$ <input type="text"/>
 $\frac{36}{100}$ <input type="text" value="0.36"/>	 $\frac{24}{100}$ <input type="text"/>	 $\frac{8}{100}$ <input type="text"/>
 $\frac{35}{100}$ <input type="text"/>	 $\frac{72}{100}$ <input type="text"/>	 $\frac{11}{100}$ <input type="text"/>
 $\frac{\quad}{100}$ <input type="text"/>	 $\frac{\quad}{100}$ <input type="text"/>	 $\frac{\quad}{100}$ <input type="text"/>
 $\frac{\quad}{100}$ <input type="text"/>	 $\frac{\quad}{100}$ <input type="text"/>	 $\frac{\quad}{100}$ <input type="text"/>