






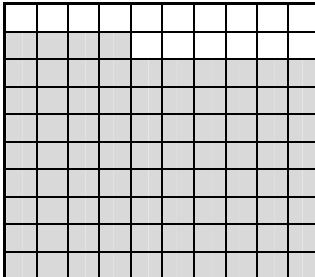









Writing Tenths and Hundredths as Decimals (3)



Name: _____

Date: _____

- Write as decimals...

| | | |
|---|--|--|
|  $\frac{3}{10}$ <div style="border: 1px solid black; padding: 2px; display: inline-block;">0.3</div> |  $\frac{2}{10}$ <div style="border: 1px solid black; padding: 2px; display: inline-block;"></div> |  $\frac{5}{10}$ <div style="border: 1px solid black; padding: 2px; display: inline-block;"></div> |
|  $\frac{16}{100}$ <div style="border: 1px solid black; padding: 2px; display: inline-block;">0.16</div> |  $\frac{76}{100}$ <div style="border: 1px solid black; padding: 2px; display: inline-block;"></div> |  $\frac{84}{100}$ <div style="border: 1px solid black; padding: 2px; display: inline-block;"></div> |
|  $\frac{9}{100}$ <div style="border: 1px solid black; padding: 2px; display: inline-block;"></div> |  $\frac{55}{100}$ <div style="border: 1px solid black; padding: 2px; display: inline-block;"></div> |  $\frac{32}{100}$ <div style="border: 1px solid black; padding: 2px; display: inline-block;"></div> |
|  $\frac{\quad}{100}$ <div style="border: 1px solid black; padding: 2px; display: inline-block;"></div> |  $\frac{\quad}{100}$ <div style="border: 1px solid black; padding: 2px; display: inline-block;"></div> |  $\frac{\quad}{100}$ <div style="border: 1px solid black; padding: 2px; display: inline-block;"></div> |
|  $\frac{\quad}{100}$ <div style="border: 1px solid black; padding: 2px; display: inline-block;"></div> |  $\frac{\quad}{100}$ <div style="border: 1px solid black; padding: 2px; display: inline-block;"></div> |  $\frac{\quad}{100}$ <div style="border: 1px solid black; padding: 2px; display: inline-block;"></div> |