



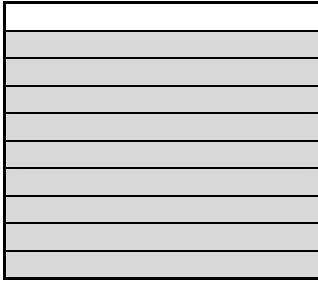












Writing Tenths and Hundredths as Decimals (2)



Name: _____

Date: _____

- Write as decimals...

 $\frac{3}{10}$ <input type="text" value="0.3"/>	 $\frac{7}{10}$ <input type="text"/>	 $\frac{9}{10}$ <input type="text"/>
 $\frac{77}{100}$ <input type="text" value="0.77"/>	 $\frac{97}{100}$ <input type="text"/>	 $\frac{73}{100}$ <input type="text"/>
 $\frac{37}{100}$ <input type="text"/>	 $\frac{91}{100}$ <input type="text"/>	 $\frac{62}{100}$ <input type="text"/>
 $\frac{\quad}{100}$ <input type="text"/>	 $\frac{\quad}{100}$ <input type="text"/>	 $\frac{\quad}{100}$ <input type="text"/>
 $\frac{\quad}{100}$ <input type="text"/>	 $\frac{\quad}{100}$ <input type="text"/>	 $\frac{\quad}{100}$ <input type="text"/>