


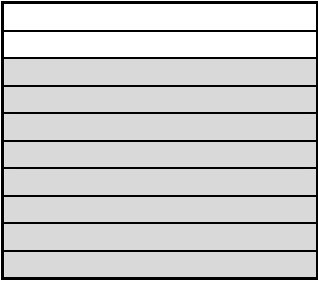













# Writing Tenths and Hundredths as Decimals (1)



Name: \_\_\_\_\_

Date: \_\_\_\_\_

- Write as decimals...

 $\frac{3}{10}$ <input type="text" value="0.3"/>	 $\frac{8}{10}$ <input type="text"/>	 $\frac{2}{10}$ <input type="text"/>
 $\frac{1}{10}$ <input type="text"/>	 $\frac{6}{10}$ <input type="text"/>	 $\frac{5}{10}$ <input type="text"/>
 $\frac{9}{10}$ <input type="text"/>	 $\frac{4}{10}$ <input type="text"/>	 $\frac{7}{10}$ <input type="text"/>
 $\frac{9}{100}$ <input type="text" value="0.09"/>	 $\frac{8}{100}$ <input type="text"/>	 $\frac{6}{100}$ <input type="text"/>
 $\frac{4}{100}$ <input type="text"/>	 $\frac{5}{100}$ <input type="text"/>	 $\frac{2}{100}$ <input type="text"/>