



Hi kids, it's Rodger Rabbit again! Now we have talked about how to round different numbers, try to sort these numbers out for me!

Thanks! 

Round to the nearest 10

72

47

33


16

21

11

94

55



Round to the nearest 100

292

643

238

67

124


541

717

783



Q: What is a rabbits favourite dance style?
A: Hip-Hop!



Hi kids, it's Rodger Rabbit again! Now we have talked about how to round different numbers, try to sort these numbers out for me!

Thanks! 

Round to the nearest 10

41

86

107

245

419

677



Round to the nearest 100

375

219

962

1809

2214

3055



Round to the nearest 1000

1383

2619

3031

4570

10,619

15,202



Q: What do you get when you cross a rabbit with a leaf blower?
A: A hare dryer!

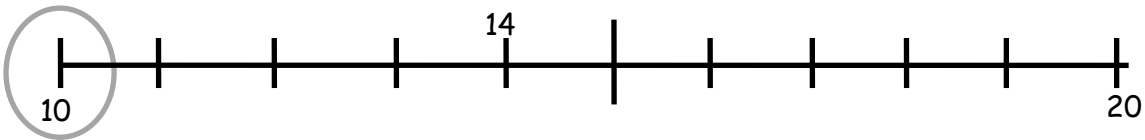


Hi kids, it's Rodger Rabbit again!
Mark on the line where each number should
be and circle which number it rounds to.

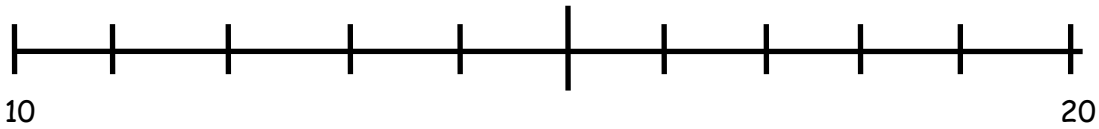
Thanks!



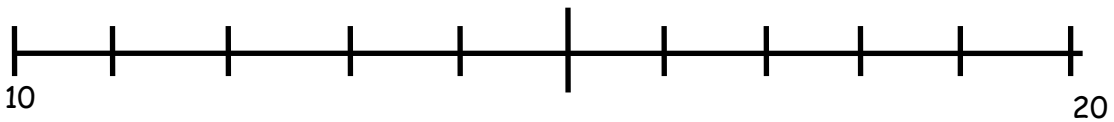
Example: Round 14 to the nearest ten.



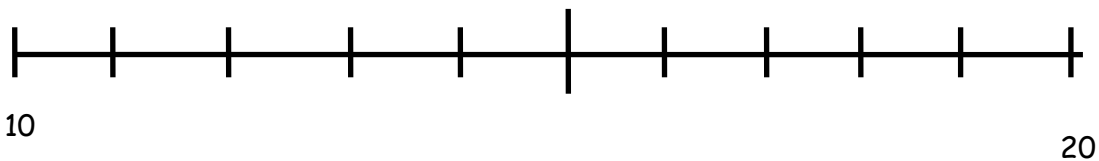
Qs 1) Round 12 to the nearest ten.



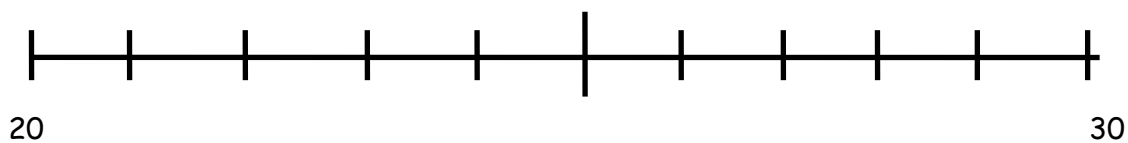
Qs. 2) Round 19 to the nearest ten.



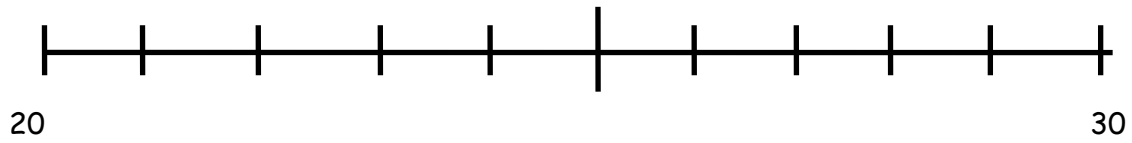
Qs.3) Round 17 to the nearest ten.



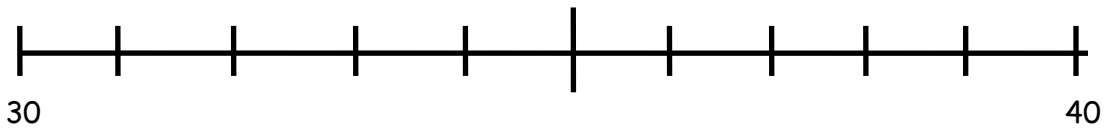
Qs. 4) Round 23 to the nearest ten.



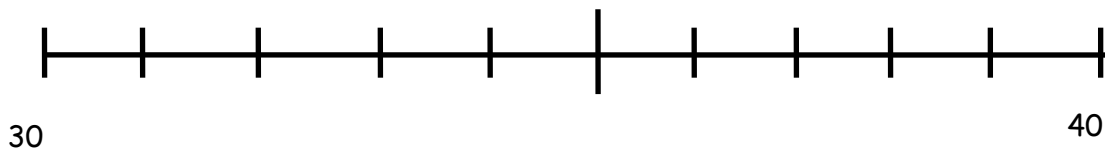
Qs. 5) Round 26 to the nearest ten.



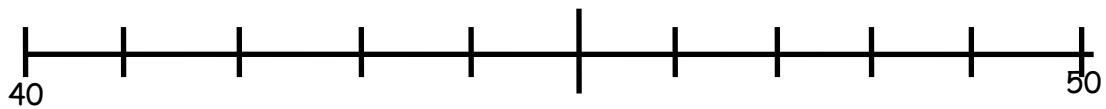
Qs. 6) Round 33 to the nearest ten.



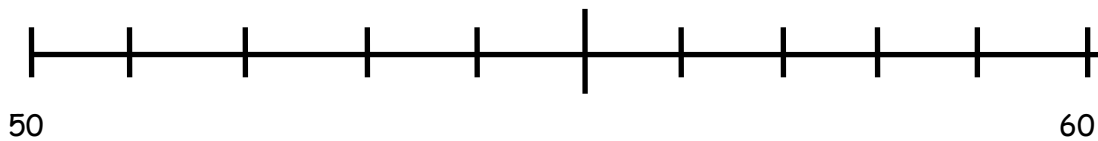
Qs. 7) Round 35 to the nearest ten.



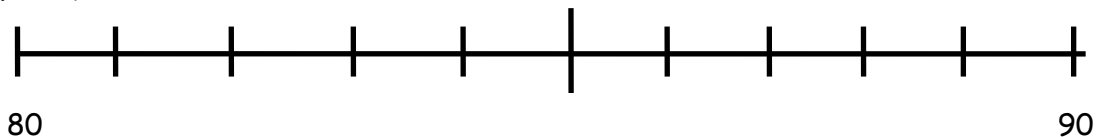
Qs. 8) Round 48 to the nearest ten.



Qs. 9) Round 52 to the nearest ten.



Qs. 10) Round 85 to the nearest ten.



Good work year 5! How did you find this task?



Q: What do you get when you cross an insect with a rabbit?
A: Bugs Bunny