

Question Card

Use a piece of scrap paper or your mini whiteboard to order these negative and positive numbers, starting with the lowest number!

Check with an adult to see if you are right.

0, 5, 4, -10, -1, 3, -5, 2, 10

Question Card

Spain's average temperature for June is 28 degrees.

England's average temperature for June is 19 degrees.

Antarctica's average temperature for June is -61 degrees.

Which country is the hottest?

Question Card

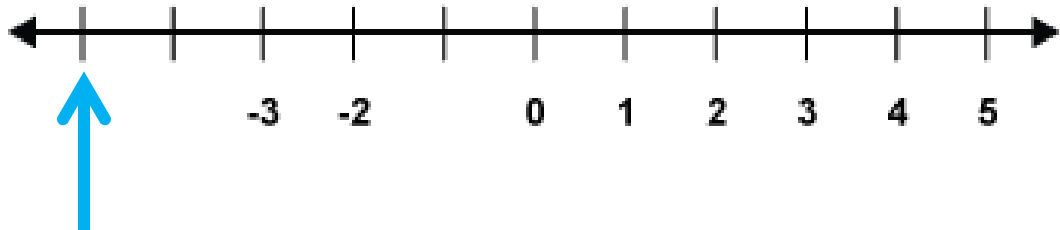
Use a piece of scrap paper or your mini whiteboard to order these negative and positive temperatures, starting with the lowest number! Check with an adult to see if you are right.

16°C 37°C -33°C -6°C -25°C 2°C

25°C 11°C -14°C

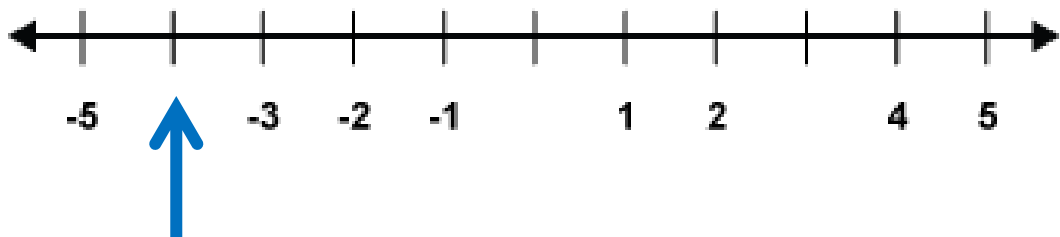
Question Card

What number does the arrow point to on the number line?



Question Card

What number does the arrow point to on the number line?



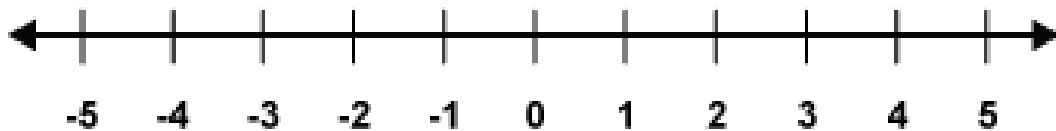
Question Card

Use a piece of scrap paper or your mini whiteboard to order these negative and positive temperatures, starting with the lowest number! Check with an adult to see if you are right.

-21 **36** **-33** **21**
-16 **-4** **35**

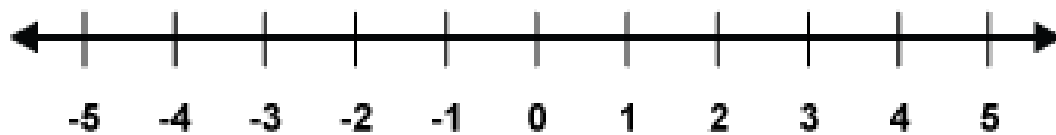
Question Card

Using the number line below if you need to, add 5 onto -3. Ask an adult for help if you get stuck, or to check your answer when you are finished.



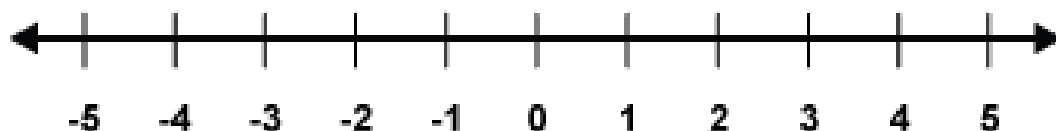
Question Card

Using the number line below if you need to, add 6 onto -5. Ask an adult for help if you get stuck, or to check your answer when you are finished.



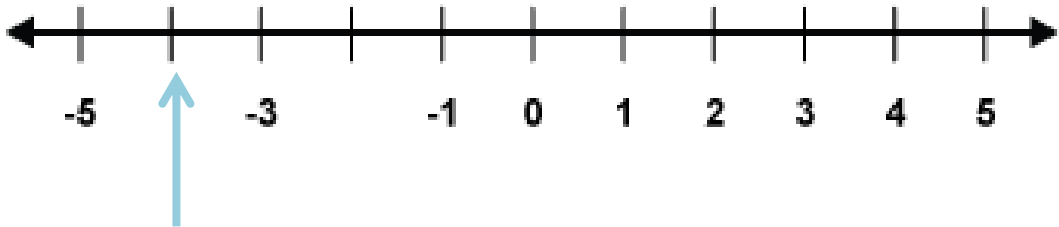
Question Card

Using the number line below if you need to, add 6 onto -5. Ask an adult for help if you get stuck, or to check your answer when you are finished.



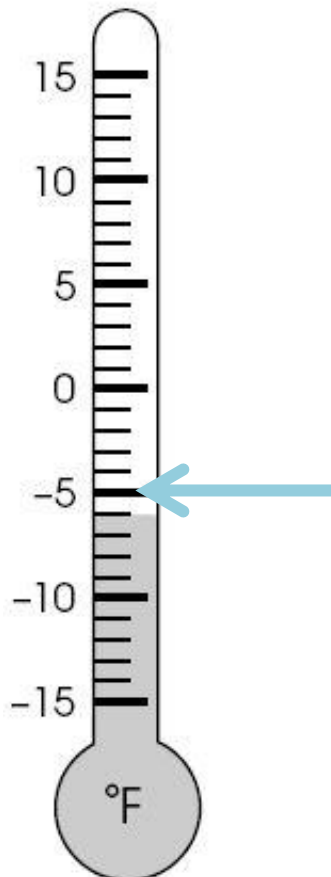
Question Card

What number does the arrow point to on the number line?



Question Card

What temperature does the arrow show on the thermometer?



Question Card

What temperature does the arrow show on the thermometer?

