

Question Card

Use a piece of scrap paper or your mini whiteboard to order these negative and positive numbers, starting with the lowest number!

Check with an adult to see if you are right.

-7, -100, 0, 24, -1, 11, -5, -6, 1, 3, -26

Question Card

Spain's average temperature for June is 28 degrees.

England's average temperature for June is 19 degrees.

Antarctica's average temperature for June is -61 degrees.

What is the difference in temperature between Spain and England?

Question Card

Use a piece of scrap paper or your mini whiteboard to order these negative and positive temperatures, starting with the lowest number! Check with an adult to see if you are right.

16°C 37°C -33°C -6°C -25°C 2°C
25°C 11°C -14°C

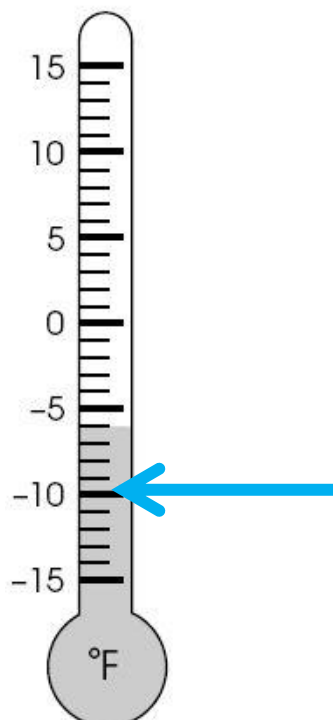
Question Card

Use a piece of scrap paper or your mini whiteboard to order these negative and positive temperatures, starting with the lowest number! Check with an adult to see if you are right.

-15 13 -30 -18 0 -7 -8

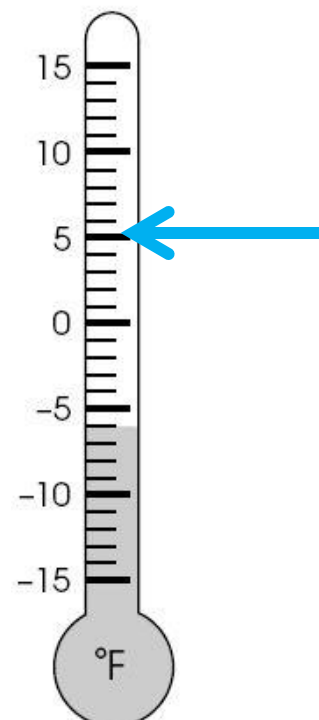
Question Card

If the temperature was at the point where the arrow is and increased by seven degrees, what temperature would the thermometer show?



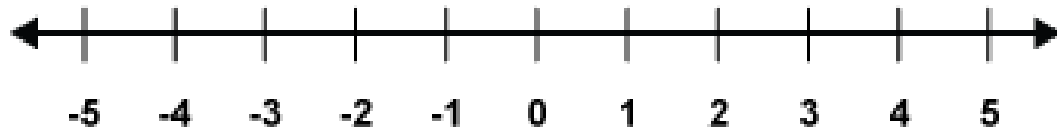
Question Card

If the temperature was at the point where the arrow is and decreased by 15 degrees, what temperature would the thermometer show?

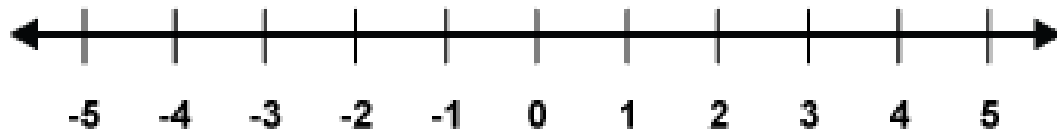


Question Card

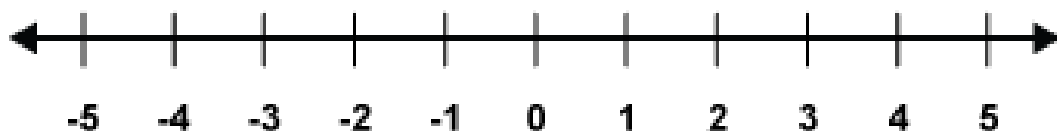
Using the number line below if you need to, try to add 5 onto -2.
Ask an adult for help if you get stuck, or to check your answer
when you are finished.

**Question Card**

Using the number line below if you need to, add 7 onto -4. Ask an
adult for help if you get stuck, or to check your answer when you
are finished.

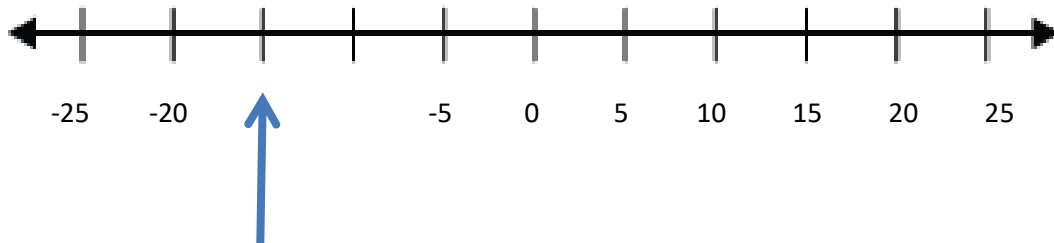
**Question Card**

Using the number line below if you need to, subtract 7 from 4. Ask
an adult for help if you get stuck, or to check your answer when
you are finished.



Question Card

What number does the arrow point to on the number line?

**Question Card**

If the temperature was at the point where the arrow is and got five degrees warmer, what temperature would the thermometer show?

**Question Card**

If the temperature was at the point where the arrow is and got ten degrees colder, what temperature would the thermometer show?

