




I am learning to order numbers up to 1000



1. Put these numbers in order from smallest to biggest:

a) 24      29      22      41      72      38

b) 87      26      56      75      36      71

c) 15      52      51      18      98      49

2. Put these numbers in order from biggest to smallest:

a) 44      59      42      41      82      18

b) 87      36      76      75      46      31

c) 15      12      51      18      58      59