



Please do not print me!

Remember to print from page 2 to avoid wasting paper and ink.
If you do find me, then visit [twinkl.co.uk](https://www.twinkl.co.uk) to find out why **millions of educators** worldwide love twinkl.

A brief word about copyright...

By downloading this resource, you agree to the following:



You may use this resource for personal and/or classroom use only.

In order to support us, we ask that you always acknowledge www.twinkl.co.uk as the source of the resource. **If you love these resources, why not let others know about Twinkl?**



You must not reproduce or share this resource with others in any form. They are more than welcome to download the resource directly from us.

You must not host or in any other way share our resources directly with others, without our prior written permission.

We also ask that this product is not used for commercial purposes and also that you do not alter the digital versions of our products in any way.

Thank you for downloading!

Twinkl Educational Publishing. Your first choice for easy to use, trusted and high quality teaching materials for educators and parents worldwide
- professionally crafted materials with a personal touch.


[twinkl.co.uk](https://www.twinkl.co.uk)

Date: _____ Name: _____

Negative Numbers in Context


Aim : Use negative numbers in context

1. The highest temperature recorded on Earth is 56°C . The coldest temperature recorded on Earth is -89°C . What is the difference between these temperatures?



Answer:

2. George has $\pounds 1346$ in his bank account. He buys a holiday, which costs $\pounds 1750$. How much will he be overdrawn?




Answer:

3. The temperature in the freezer is -28°C . A loaf of bread is taken out of the freezer and allowed to thaw overnight in the kitchen, where the temperature is 18°C . By how much will the temperature of the bread rise?




Answer:

4. Ellie is £25 overdrawn. She needs to spend £134 repairing her car. How much will she be overdrawn now?



Answer:

5. The temperature outside at 3pm is -12°C . Overnight the temperature drops to -31°C . By how much does the temperature fall?



Answer:

6. Mr and Mrs Jones have £456.75 in their bank account. They have to pay the following bills.

Electricity	£234.97
Gas	£132.17
Council Tax	£108.34

What will their account balance be after paying the bills?

Answer:

Negative Numbers in Context

Answer sheet

Question	Answer
1	$56 - (-89) = 145$. The answer is 145°C
2	$\pounds 1750 - \pounds 1346 = \pounds 404$
3	$18 - (-28) = 46$. The temperature is 46°C .
4	$-\pounds 25 - \pounds 134 = -\pounds 159$. $\pounds 159$ overdrawn.
5	$-31 - (-12) = -19$. The temperature falls by 19°C .
6	Total bills: $\pounds 234.97 + \pounds 132.17 + \pounds 108.34 = \pounds 475.48$ Balance: $\pounds 456.75 - \pounds 475.48 = -\pounds 18.73$. The balance is $\pounds 18.73$ overdrawn.