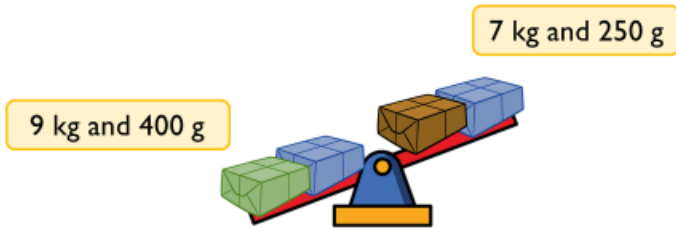



The green parcel weighs 5 kg.  
Can you work out what the blue and brown parcel weigh?




How much would the green and brown parcel weigh altogether?

Dora buys two peaches and three pears.

One peach weighs 75 g. 

Three pears weigh the same as two peaches.

How much does one pear weigh? 

Tommy is weighing a toy car.  
Use this to work out what the other children's cars weigh.

