


Comparing Capacity

Compare the capacity and fill in the box with appropriate symbol $<$, $>$ or $=$ in each problem.

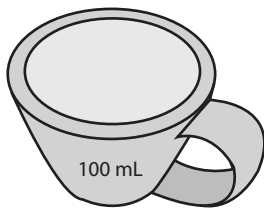
1)



2)



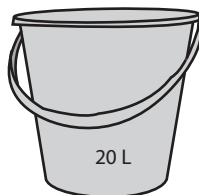
3)



4)



5)




Answer Key

Compare the capacity and fill in the box with appropriate symbol $<$, $>$ or $=$ in each problem.

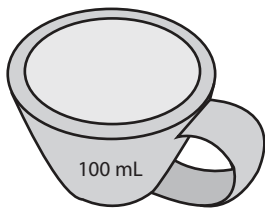
1)

 $<$ 

2)

 $=$ 

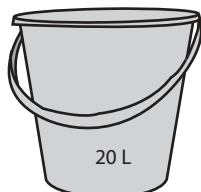
3)

 $>$ 

4)

 $<$ 

5)

 $>$ 