


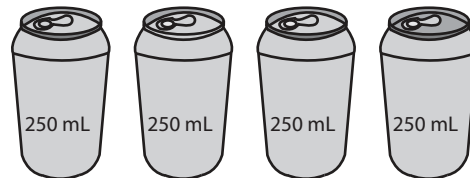
**Comparing Capacity**

Compare the capacity and fill in the box with appropriate symbol  $<$ ,  $>$  or  $=$  in each problem.

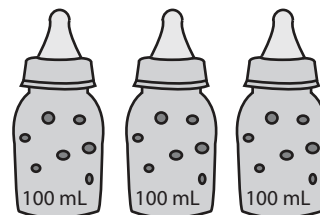

1)




2)



3)



4)





5)



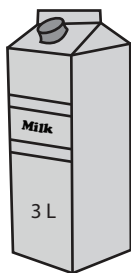
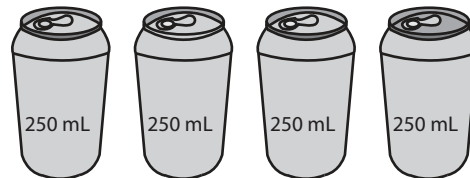
**Answer Key**

Compare the capacity and fill in the box with appropriate symbol  $<$ ,  $>$  or  $=$  in each problem.


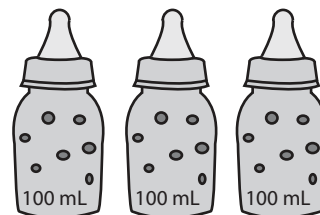
1)

 $=$ 

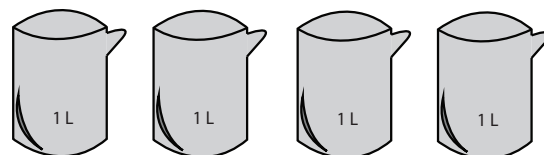
2)

 $>$ 

3)

 $<$ 

4)

 $<$ 

5)

 $>$ 