





Use the clues to work out who has which container.

I have exactly half a litre  Annie


I have 1,000 ml  Ron

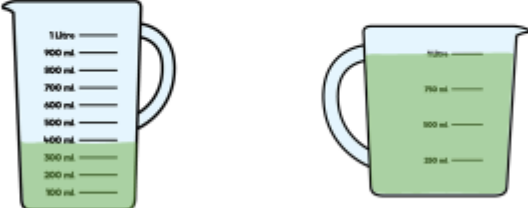
I have more than 300 ml but less than 400 ml  Eva



A B C

Tommy is pouring drinks using these jugs.
A drink is 125 ml.

 Tommy: If I pour three more drinks using jug 2, both jugs will have the same amount of juice in.



Jug 1 Jug 2

Is Tommy correct?
If not, how much juice will be left in jug 2?

15

© White Rose

Rosie has a litre bottle of water.

She pours a drink for herself and two friends.
Their glasses can hold up to 250 ml.



Teddy has more than Amir.
Rosie has the most.

How much could each child have in their glass?

How much would be left in the bottle?