
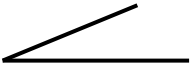


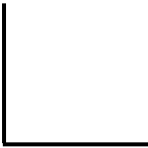

Name: .....



# Parallel or Perpendicular?

Can I recognise parallel and perpendicular lines?

Are these lines parallel, perpendicular or neither? Can you explain why?

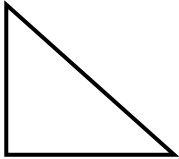




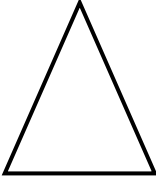
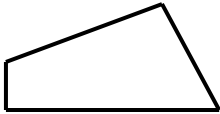
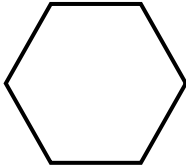
(a) .....  (d) ..... 

(b) .....  (e) ..... 

(c) .....  (f) ..... 

With each of the shapes below can you:

- (A) Mark the pairs of **parallel** and **perpendicular** lines?  
(B) Write how many pairs of **parallel** and **perpendicular** lines each shape has?

	Parallel = Perpendicular =		Parallel = Perpendicular =
	Parallel = Perpendicular =		Parallel = Perpendicular =
	Parallel = Perpendicular =		Parallel = Perpendicular =
	Parallel = Perpendicular =		Parallel = Perpendicular =

Name: .....

## Parallel or Perpendicular?