


Measuring Angles

Name: _____ Date: _____




Use your protractor to extend the lines and measure each angle.

(1)



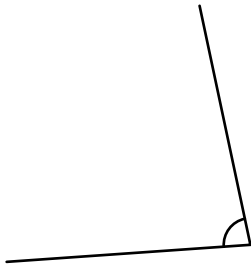
This angle is
_____ degrees.

(6)



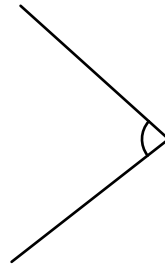
This angle is
_____ degrees.

(2)



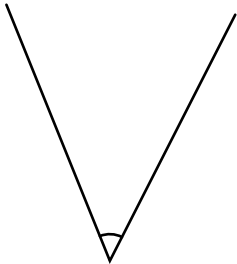
This angle is
_____ degrees.

(7)



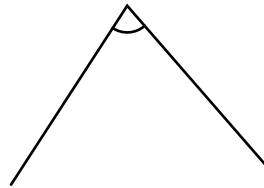
This angle is
_____ degrees.

(3)



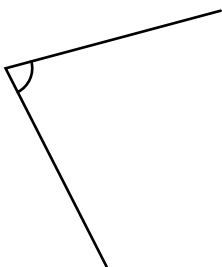
This angle is
_____ degrees.

(8)



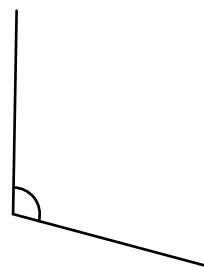
This angle is
_____ degrees.

(4)



This angle is
_____ degrees.

(9)



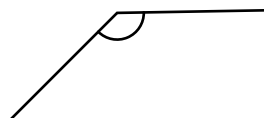
This angle is
_____ degrees.

(5)



This angle is
_____ degrees.

(10)



This angle is
_____ degrees.


Measuring Angles

ANSWER KEY




Use your protractor to extend the lines and measure each angle.

(1)



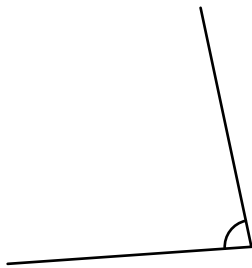
This angle is
143 degrees.

(6)



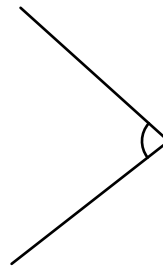
This angle is
9 degrees.

(2)



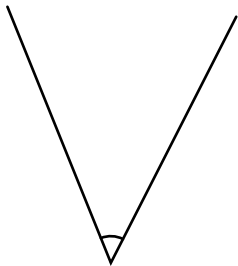
This angle is
82 degrees.

(7)



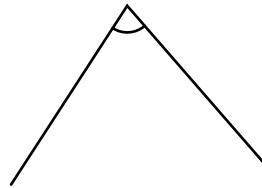
This angle is
80 degrees.

(3)



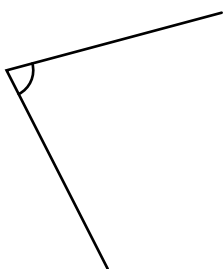
This angle is
49 degrees.

(8)



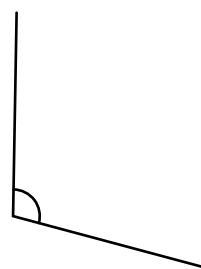
This angle is
74 degrees.

(4)



This angle is
78 degrees.

(9)



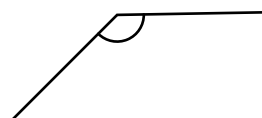
This angle is
104 degrees.

(5)



This angle is
136 degrees.

(10)



This angle is
136 degrees.