

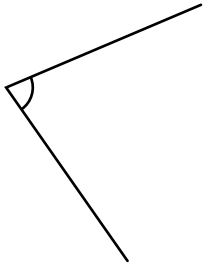
Measuring Angles

Name: _____ Date: _____



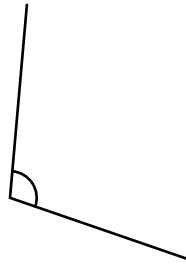
Use your protractor to extend the lines and measure each angle.

(1)



This angle is
_____ degrees.

(6)



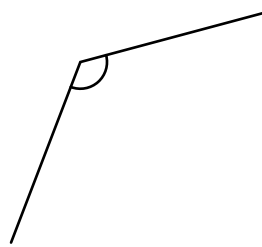
This angle is
_____ degrees.

(2)



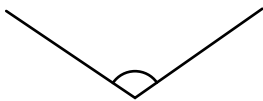
This angle is
_____ degrees.

(7)



This angle is
_____ degrees.

(3)



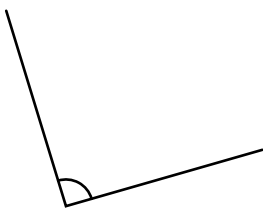
This angle is
_____ degrees.

(8)



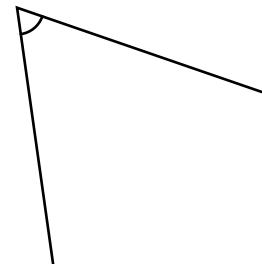
This angle is
_____ degrees.

(4)



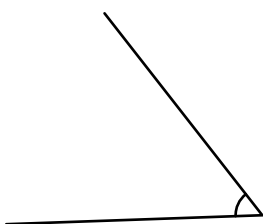
This angle is
_____ degrees.

(9)



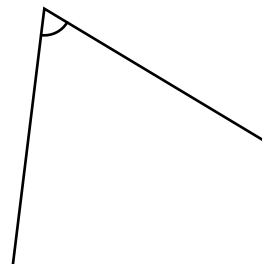
This angle is
_____ degrees.

(5)



This angle is
_____ degrees.

(10)



This angle is
_____ degrees.

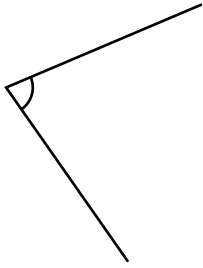
Measuring Angles

ANSWER KEY



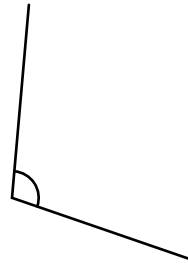
Use your protractor to extend the lines and measure each angle.

(1)



This angle is
78 degrees.

(6)



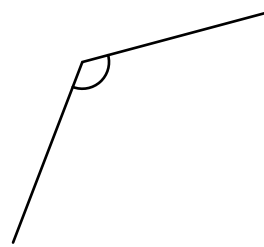
This angle is
104 degrees.

(2)



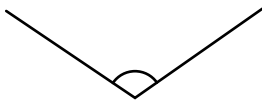
This angle is
6 degrees.

(7)



This angle is
126 degrees.

(3)



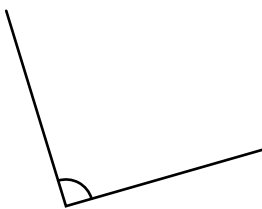
This angle is
111 degrees.

(8)



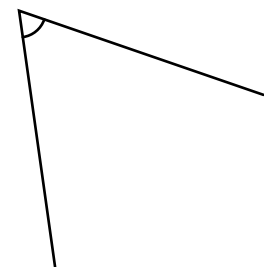
This angle is
142 degrees.

(4)



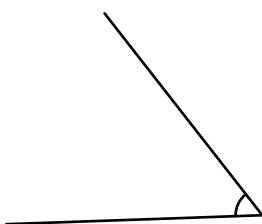
This angle is
91 degrees.

(9)



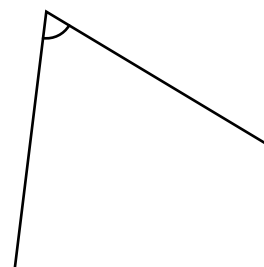
This angle is
63 degrees.

(5)



This angle is
54 degrees.

(10)



This angle is
66 degrees.