


Autumn Test 5


Questions, Answers, Strand and Level Information


Read the following instructions or press 'play'  and listen to the instructions being read from the CD-ROM.

Listen carefully to the instructions I am going to give you. When I have finished reading them, I will answer any questions. However, you will not be able to ask any questions once the test has begun.

I am going to ask you 20 questions for the test. On your sheet there is an answer box for each question, where you should write the answer to the question and nothing else. You should work out the answer to each question in your head, but you may jot things down outside the answer box if this helps you. Do not try to write down your calculation because this will waste time and you may miss the next question. For some of the questions, important information is already written down for you on the sheet.

I will read out each question twice. Listen carefully both times. You will then have time to work out your answer. If you cannot work out an answer, put a cross in the answer box. If you make a mistake, cross out the wrong answer and write the correct one next to it. There are some easy and some harder questions, so do not be put off if you cannot answer a question.

Now pause, or press 'pause'  on your CD player or computer. Ask the children if they have any questions. Once you have answered all questions, read out the following instructions. Alternatively, play the audio recording from the CD-ROM.

	Answer	Strand	Level
 Now we are ready to start the test.			
For this group of questions you will have 5 seconds to work out each answer and write it down.			
1 Double forty-three.	86	3	3
2 Write in figures the number nine thousand and twenty-three.	9023	2	4
3 Multiply six by seven.	42	3	4
4 Find one-tenth of forty.	4	4	4
5 What is seventy-seven multiplied by two?	154	3	4
For this group of questions you will have 10 seconds to work out each answer and write it down.			
6 Look at your answer sheet. What fraction of the shape is shaded?	$\frac{2}{7}$	2	3
7 What is the third multiple of thirty?	90	3	4
8 Add nineteen and thirty-eight.	57	4	3
9 What is the next prime number after eleven?	13	3	5
10 Calculate three-tenths of fifty.	15	4	5
11 What is the difference between seven hundred and twenty and two hundred and sixty?	460	4	4
12 Five j is forty-five. What is the value of j ?	9	1	5
13 What time is it ten minutes after half past four?	20 to 5 or 4:40	6	3
14 Look at your answer sheet. What is the mode of the set of numbers?	1	7	4
15 How many kilograms equal sixteen thousand grams?	16	6	4
For this group of questions you will have 15 seconds to work out each answer and write it down.			
16 Look at your answer sheet. Circle a factor of twenty-four.	8	3	4
17 Multiply thirty by forty.	1200	3	5
18 What is the product of thirty-four and four?	136	4	4
19 Look at your answer sheet. Tick all the shapes you would need to make the net of a hexagonal prism.	2 hexagons and 6 rectangles	5	4
20 Joe had six pounds. He bought six whoopi cushions for seventy pence each. How much change did he get?	£1.80	1/4	4

Now put down your pen or pencil. The test is finished.