


Summer Test 7


Questions, Answers, Strand and Level Information


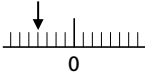
Read the following instructions or press 'play'  and listen to the instructions being read from the CD-ROM.

Listen carefully to the instructions I am going to give you. When I have finished reading them, I will answer any questions. However, you will not be able to ask any questions once the test has begun.

I am going to ask you 15 questions for the test. On your sheet there is an answer box for each question, where you should write the answer to the question and nothing else. You should work out the answer to each question in your head, but you may jot things down outside the answer box if this helps you. Do not try to write down your calculation because this will waste time and you may miss the next question. For some of the questions, important information is already written down for you on the sheet.

I will read out each question twice. Listen carefully both times. You will then have time to work out your answer. If you cannot work out an answer, put a cross in the answer box. If you make a mistake, cross out the wrong answer and write the correct one next to it. There are some easy and some harder questions, so do not be put off if you cannot answer a question.

Now pause, or press 'pause'  on your CD player or computer. Ask the children if they have any questions. Once you have answered all questions, read out the following instructions. Alternatively, play the audio recording from the CD-ROM.

	Answer	Strand	Level
 Now we are ready to start the test.			
For this group of questions you will have 5 seconds to work out each answer and write it down.			
1 Write the number that is five more than twenty-two.	27	4	2
2 Subtract thirty-three from sixty-four.	31	4	3
3 What must you add to one to make a total of fifteen?	14	3	2
4 How many centimetres are there in half a metre?	50	6	3
5 What is forty-five to the nearest ten?	50	2	2
6 What is thirty-six times ten?	360	4	3
7 Write the number that has six hundreds, five units and a ten.	615	2	3
8 Look at your answer sheet. Circle the even number.	354	2	2
9 Count on six twos from thirty.	42	3	2
10 Look at your answer sheet. Circle the vertical line.		5	4
For this group of questions you will have 10 seconds to work out each answer and write it down.			
11 A television programme starts at half past five and lasts for twenty minutes. What time does it finish?	10 to 6 or 5:50	1/6	3
12 What is the difference between thirty and one hundred and ten?	80	3	3
13 If a packet of sweets costs twenty-five pence, what would be the cost of five packets?	£1.25	1/4	4
14 Look at your answer sheet. Draw an arrow to show where minus four is on the number line.		2	3
15 You go into a shop with seventy pence and get thirty pence change after buying some chocolate. How much did you spend?	40p	1/4	2

Now put down your pen or pencil. The test is finished.