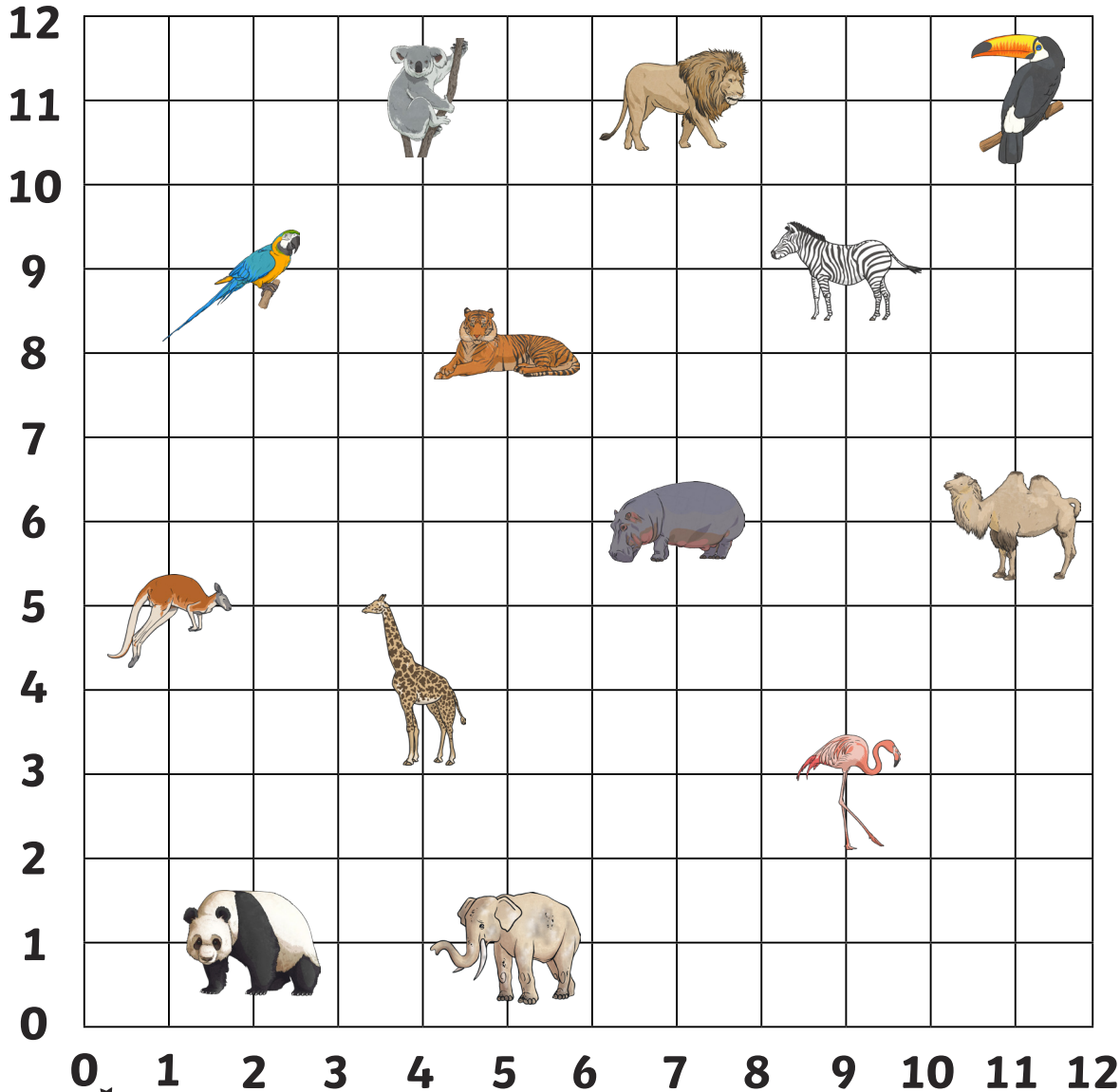


Zoo Coordinates

Which zoo animal is at the following coordinates?



$(7,11) =$ _____ $(7,6) =$ _____

$(2,1) =$ _____ $(11,6) =$ _____

$(11,11) =$ _____ $(1,5) =$ _____

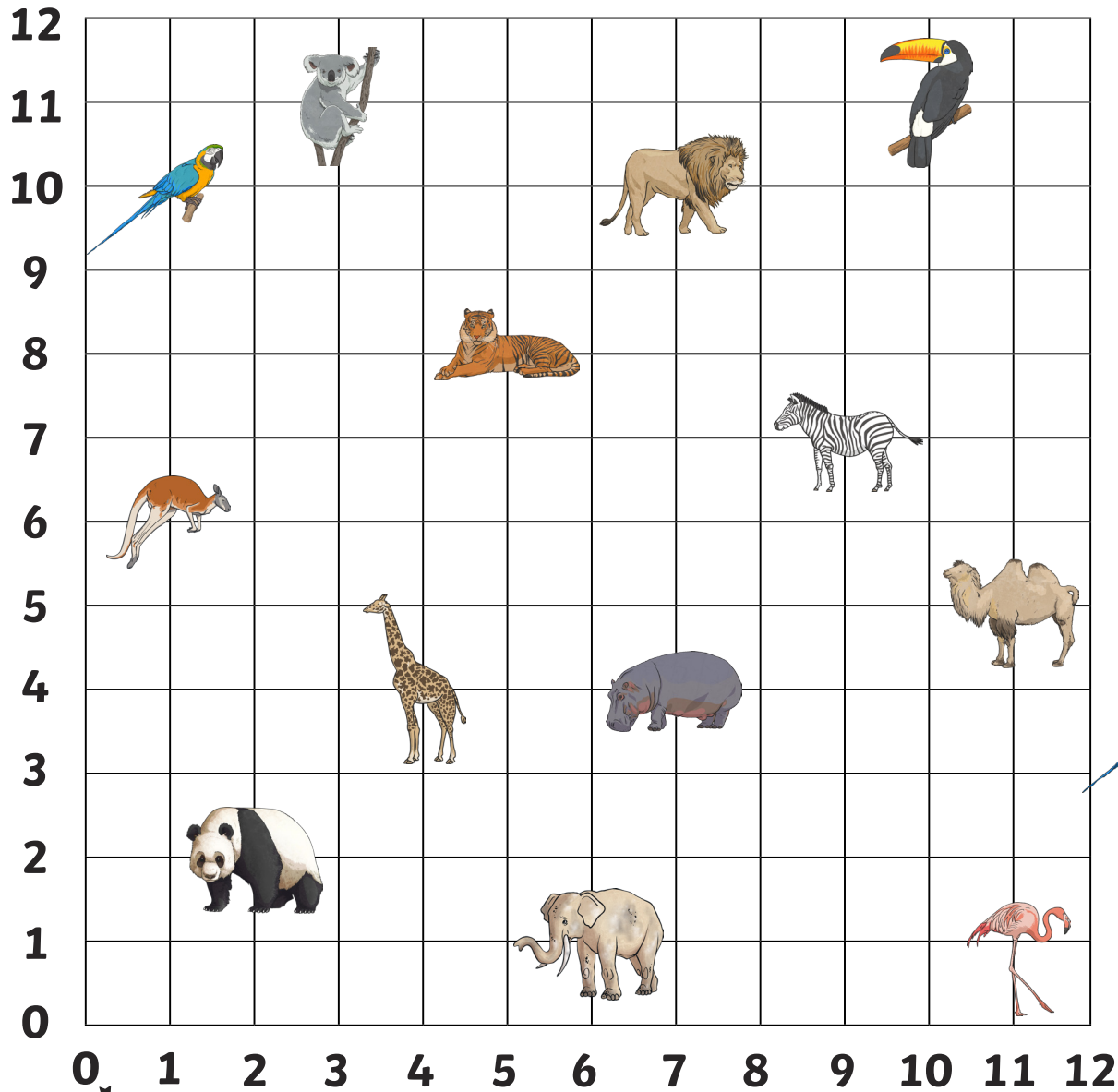
$(9,3) =$ _____ $(9,9) =$ _____

$(4,11) =$ _____ $(5,8) =$ _____

parrot	kangaroo	panda
koala	tiger	giraffe
elephant	flamingo	hippo
camel	zebra	lion
toucan		




Zoo Coordinates



Write the coordinates for the zoo animals:



= (,)



= (,)



= (,)




= (,)



= (,)



= (,)



= (,)



= (,)



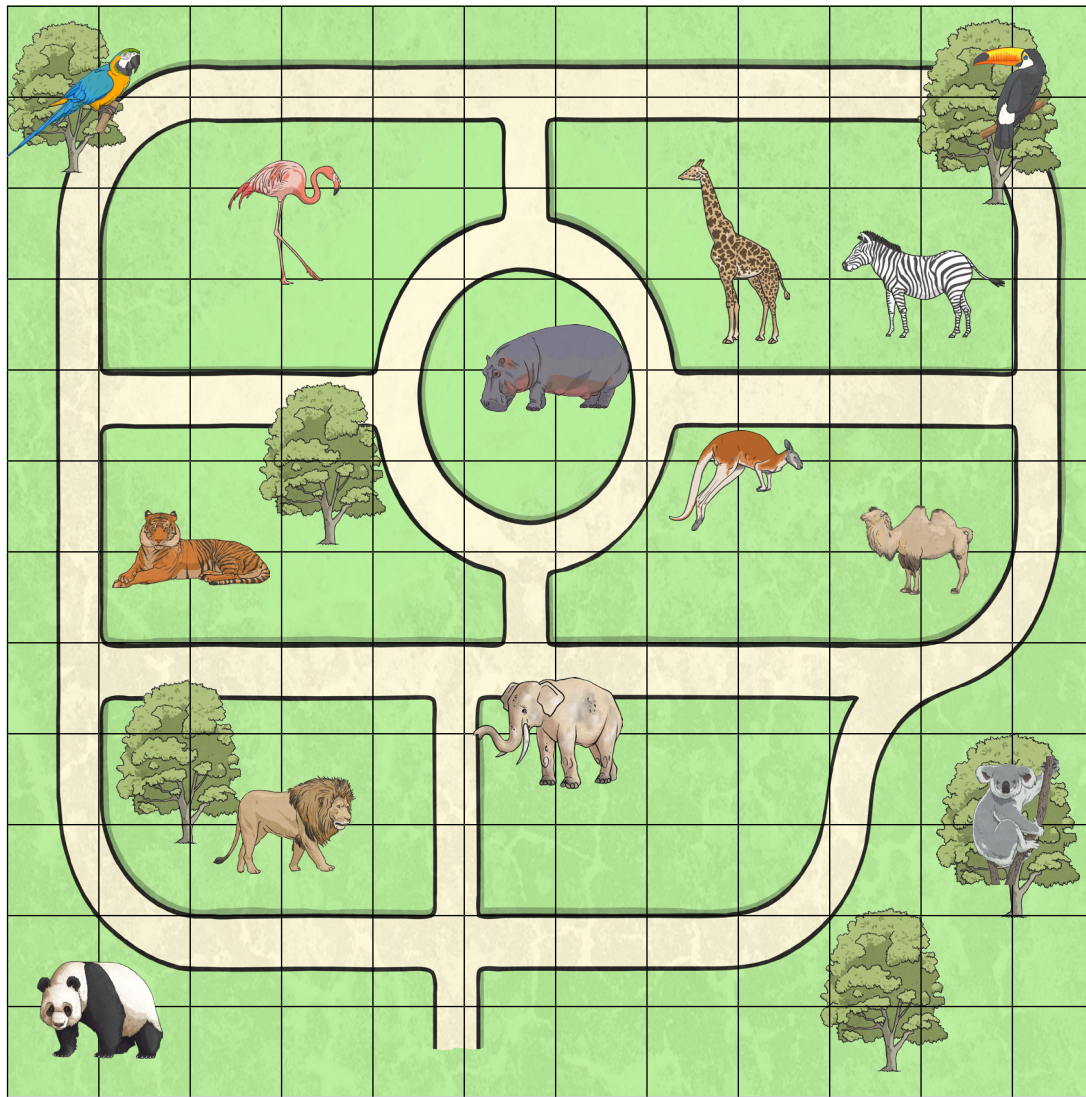
= (,)



= (,)

Zoo Coordinates

12
11
10
9
8
7
6
5
4
3
2
1
0



0 1 2 3 4 5 6 7 8 9 10 11

Which animal is at these coordinates on the zoo map?

(11,11) = _____

(2,6) = _____

(6,8) = _____

(3,10) = _____

(11,3) = _____

(1,1) = _____

Write the coordinates of these animals on the zoo map:



= _____



= _____



= _____



= _____



= _____



= _____

Draw your own zoo animals at these coordinates on the map:

(6,1)

(2,9)

(7,3)

(8,3)

(8,6)











(11,1)

Zoo Coordinates - Answers



$(7,11)$ = lion
 $(2,1)$ = panda
 $(11,11)$ = toucan
 $(9,3)$ = flamingo
 $(4,11)$ = koala
 $(7,6)$ = hippo
 $(11,6)$ = camel
 $(1,5)$ = kangaroo
 $(9,9)$ = zebra
 $(5,8)$ = tiger









	= $(3,11)$		= $(4,4)$
	= $(7,10)$		= $(1,6)$
	= $(10,11)$		= $(7,4)$
	= $(1,10)$		= $(11,5)$
	= $(5,8)$		= $(11,1)$



Which animal is at these coordinates on the zoo map?

$(11,11)$ = toucan $(2,6)$ = tiger
 $(6,8)$ = hippo $(3,10)$ = flamingo
 $(11,3)$ = koala $(1,1)$ = panda

Write the coordinates of these animals on the zoo map:

	= $(1,11)$		= $(6,4)$
	= $(3,3)$		= $(10,6)$
	= $(10,9)$		= $(8,7)$