

# Money



Pounds = £

Pence = p



How many pence  
are there in a  
pound?





Can anyone name any of the coins we use?

## Coins



1p



2p



5p



10p



20p



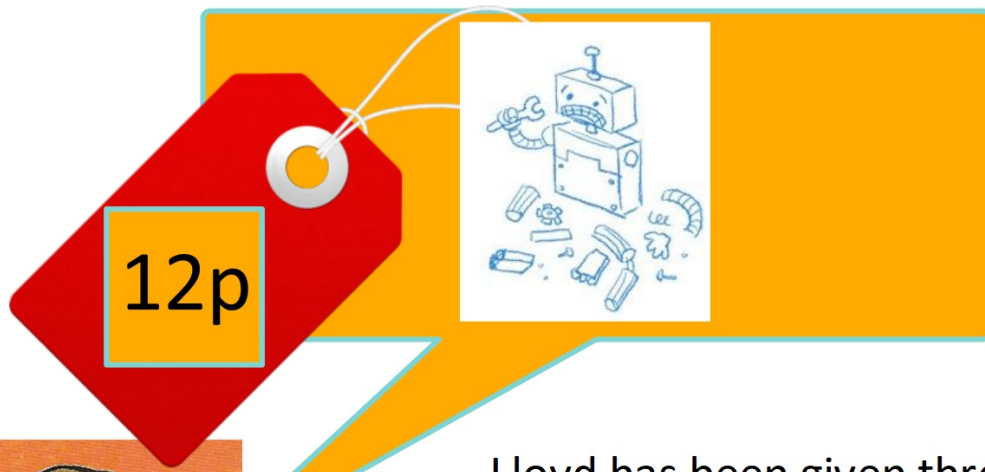
50p



£1




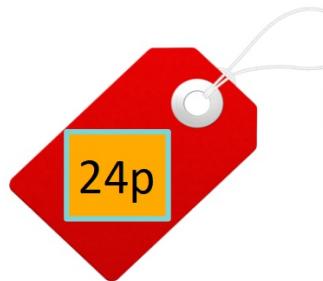
£2



Lloyd has been given three coins to replace his broken robot. Which three coins could they be?



In partners, work out which coins you will need to buy these items:



# Challenge 1

Which is the smallest coin in value?  
Arrange from smallest to biggest.



## Challenge 2

Greater than or less than using  
> or <





## Challenge 3

20p is greater than 4 other coins. Which are they?



## Demonstrate:

A pencil costs 20p. How many different combinations of coins could be used to buy the pencil?



Mr Gurney says that there are only 3 ways to make £1. Is he right or wrong? Prove it!